



# Gøy Addisjon


Finn det manglende tallet for å fullføre addisjonen!

1.  + 1 = 5 4 + 1 = 5

2.  + 4 = 5 1 + 4 = 5

3.  + 3 = 6 3 + 3 = 6

4.  + 5 = 8 3 + 5 = 8

5.  + 1 = 2 1 + 1 = 2

6.  + 4 = 6 2 + 4 = 6