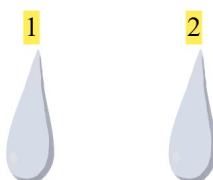
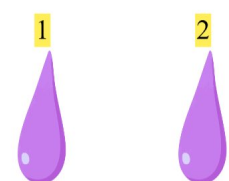



Gøy Addisjon


Finn det manglende tallet for å fullføre addisjonen!

1.  + 4 = 6 2 + 4 = 6

2.  + 4 = 8 4 + 4 = 8

3.  + 3 = 5 2 + 3 = 5

4.  + 2 = 3 1 + 2 = 3

5.  + 4 = 5 1 + 4 = 5

6.  + 1 = 4 3 + 1 = 4