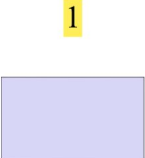
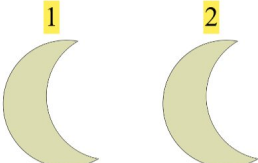


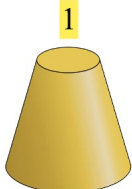
Gøy Addisjon

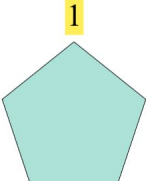
Finn det manglende tallet for å fullføre addisjonen!

1.  + 4 = 7 3 + 4 = 7

2.  + 5 = 6 1 + 5 = 6

3.  + 2 = 4 2 + 2 = 4

4.  + 4 = 5 1 + 4 = 5

5.  + 3 = 4 1 + 3 = 4

6.  + 1 = 4 3 + 1 = 4