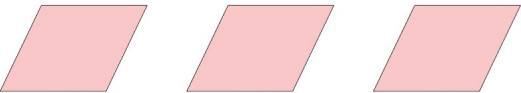







Gøy Addisjon

Finn det manglende tallet for å fullføre addisjonen!

1.  +  = 

2.  +  = 

3.  +  = 

4.  +  = 

5.  +  = 

6.  +  = 