



Gøy Addisjon

Finn det manglende tallet for å fullføre addisjonen!


1.  + 1 = 4 3 + 1 = 4

2.  + 4 = 9 5 + 4 = 9

3.  + 1 = 3 2 + 1 = 3

4.  + 2 = 3 1 + 2 = 3

5.  + 2 = 7 5 + 2 = 7

6.  + 1 = 5 4 + 1 = 5