




# Gøy Addisjon


Finn det manglende tallet for å fullføre addisjonen!

1.  + 4 = 5 1 + 4 = 5

2.  + 2 = 7 5 + 2 = 7

3.  + 5 = 10 5 + 5 = 10

4.  + 1 = 2 1 + 1 = 2

5.  + 5 = 7 2 + 5 = 7

6.  + 2 = 6 4 + 2 = 6