



Gøy Addisjon


Finn det manglende tallet for å fullføre addisjonen!


1.  + 1 = 2 1 + 1 = 2

2.  + 3 = 7 4 + 3 = 7

3.  + 3 = 6 3 + 3 = 6

4.  + 2 = 7 5 + 2 = 7

5.  + 3 = 4 1 + 3 = 4

6.  + 2 = 4 2 + 2 = 4