



# Gøy Addisjon


Finn det manglende tallet for å fullføre addisjonen!

1.  + 5 = 8 3 + 5 = 8

2.  + 5 = 9 4 + 5 = 9

3.  + 3 = 4 1 + 3 = 4

4.  + 2 = 4 2 + 2 = 4

5.  + 4 = 5 1 + 4 = 5

6.  + 5 = 10 5 + 5 = 10