



Gøy Addisjon

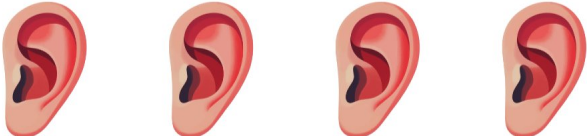
Finn det manglende tallet for å fullføre addisjonen!

1.  +  _____ =  5

2.  +  _____ =  6

3.  +  _____ =  8

4.  +  _____ =  8

5.  +  _____ =  9

6.  +  _____ =  5