




# Gøy Addisjon

Finn det manglende tallet for å fullføre addisjonen!


1.  + 4 = 5 1 + 4 = 5

2.  + 2 = 3 1 + 2 = 3

3.  + 1 = 5 4 + 1 = 5

4.  + 3 = 5 2 + 3 = 5

5.  + 5 = 8 3 + 5 = 8

6.  + 5 = 7 2 + 5 = 7