




Gøy Addisjon

Finn det manglende tallet for å fullføre addisjonen!


1.  + 1 = 3 2 + 1 = 3

2.  + 2 = 4 2 + 2 = 4

3.  + 4 = 5 1 + 4 = 5

4.  + 1 = 5 4 + 1 = 5

5.  + 3 = 6 3 + 3 = 6

6.  + 5 = 7 2 + 5 = 7