
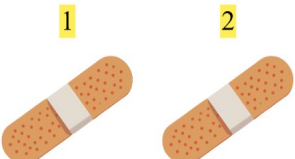


Gøy Addisjon

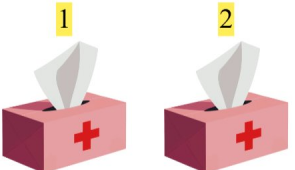
Finn det manglende tallet for å fullføre addisjonen!


1.  + 2 = 7 5 + 2 = 7

2.  + 2 = 3 1 + 2 = 3

3.  + 3 = 5 2 + 3 = 5

4.  + 3 = 7 4 + 3 = 7

5.  + 5 = 7 2 + 5 = 7

6.  + 2 = 4 2 + 2 = 4