



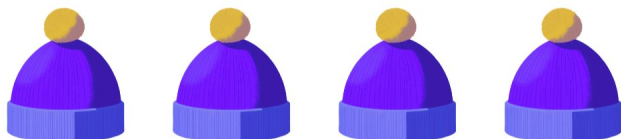





# Gøy Addisjon

Finn det manglende tallet for å fullføre addisjonen!

1.  +   =  7

2.  +   =  9

3.  +   =  6

4.  +   =  4

5.  +   =  9

6.  +   =  5