




Gøy Addisjon


Finn det manglende tallet for å fullføre addisjonen!

1.  + 5 = 10 5 + 5 = 10

2.  + 2 = 4 2 + 2 = 4

3.  + 5 = 7 2 + 5 = 7

4.  + 5 = 6 1 + 5 = 6

5.  + 4 = 6 2 + 4 = 6

6.  + 2 = 5 3 + 2 = 5