


Gøy Addisjon

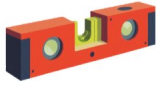


Finn det manglende tallet for å fullføre addisjonen!

1.  +  _____ =  6

2.      + _____ = 7

3.    + _____ = 7

4.     + _____ = 9

5.    + _____ = 5

6.     + _____ = 7