


# Legg sammen igjen

Navn: \_\_\_\_\_ Dato: \_\_\_\_\_


★ Hver ring har like mange. Fullfør addisjonen.

1



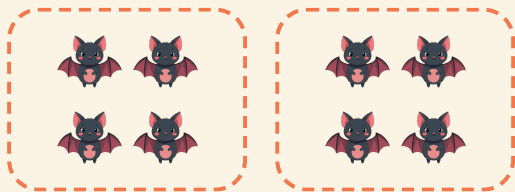
$$4 + 4 = \square$$

2




$$2 + 2 + 2 + 2 = \square$$

3



$$4 + 4 = \square$$

4



$$3 + 3 = \square$$