

Fra pluss til ganger

Navn: _____ Dato: _____


★ Tell de like gruppene. Fullfør multiplikasjonen.

1




$$2 \times 2 = \square$$

2




$$3 \times 3 = \square$$

3



$$4 \times 2 = \square$$

4



$$2 \times 2 = \square$$