


Del likt

Navn: _____ Dato: _____


★ Del haugen likt i kurvene. Skriv hvor mange hver får.

1



$$12 \div 3 = \square$$

2





$$9 \div 3 = \square$$

3



$$20 \div 4 = \square$$

4



$$16 \div 4 = \square$$