


Fra pluss til ganger

Navn: _____ Dato: _____


★ Tell de like gruppene. Fullfør multiplikasjonen.

1




$$3 \times 4 = \square$$

2




$$4 \times 3 = \square$$

3



$$3 \times 2 = \square$$

4



$$3 \times 2 = \square$$