


Rader og kolonner

Navn: _____ Dato: _____


★ Tell radene og kolonnene. Fullfør multiplikasjonsstykket.

1



$$4 \times 3 = \square$$

2




$$4 \times 6 = \square$$

3



$$3 \times 3 = \square$$

4



$$2 \times 5 = \square$$