


# Del det opp

Navn: \_\_\_\_\_ Dato: \_\_\_\_\_


★ Del haugen likt i kurvene. Skriv hvor mange hver får.

1





$$20 \div 4 = \square$$

2




$$8 \div 4 = \square$$

3



$$12 \div 3 = \square$$

4



$$16 \div 4 = \square$$