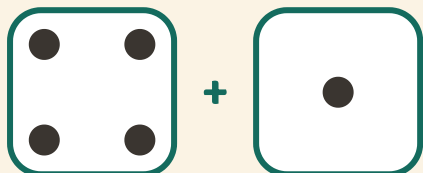


Trill og legg sammen

Navn: _____ Dato: _____

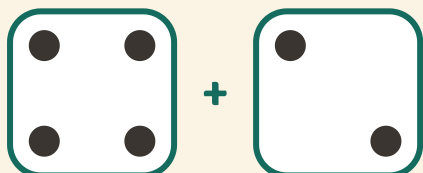
★ Tell prikkene på begge terningene. Skriv summen.

1




$$4 + 1 = \square$$

2



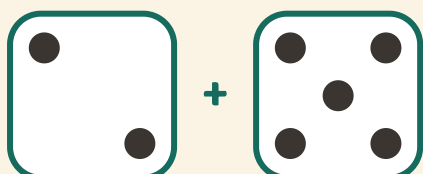
$$4 + 2 = \square$$

3



$$3 + 2 = \square$$

4



$$2 + 5 = \square$$