


# Velg riktig rutenett

Navn: \_\_\_\_\_ Dato: \_\_\_\_\_

★ Sett ring rundt rutenettet som passer til multiplikasjonen.


1

$4 \times 5$




2

$3 \times 2$



3

$4 \times 3$



4

$3 \times 5$

