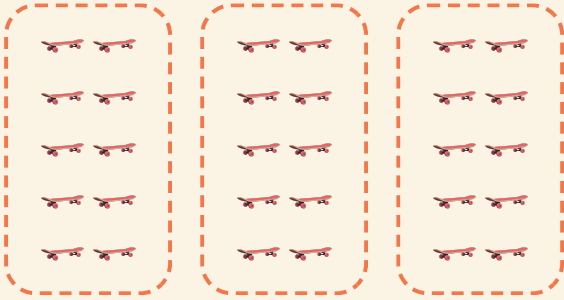


# Lette grupper

Navn: \_\_\_\_\_ Dato: \_\_\_\_\_


★ Tell de like gruppene. Fullfør multiplikasjonen.

1



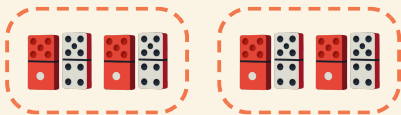
$$3 \times 10 = \square$$

2




$$4 \times 2 = \square$$

3



$$2 \times 2 = \square$$

4



$$2 \times 10 = \square$$