


# Hemmelig Kode Addisjon

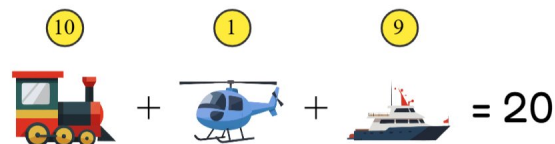
Knekk koden! Finn tallet for hvert symbol!



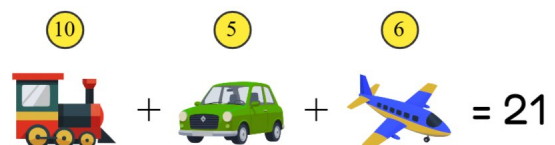
6      10      5


$$6 + 10 + 5 = 21$$

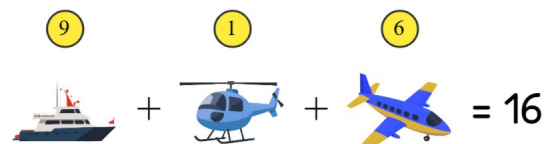
10      1      9


$$10 + 1 + 9 = 20$$

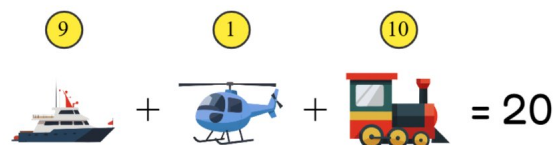
10      5      6


$$10 + 5 + 6 = 21$$

9      1      6


$$9 + 1 + 6 = 16$$

9      1      10


$$9 + 1 + 10 = 20$$