

Få det i balanse

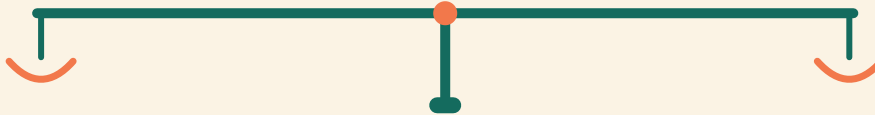
Navn: _____ Dato: _____

★ Begge sider må veie like mye. Skriv tallet som mangler.

1

$2 + 10$

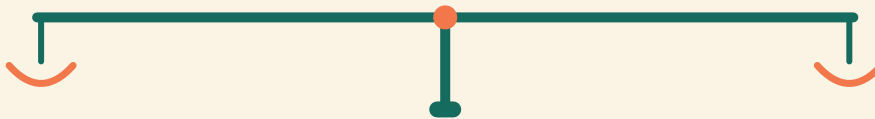
$4 + \square$



2

$16 + 2$

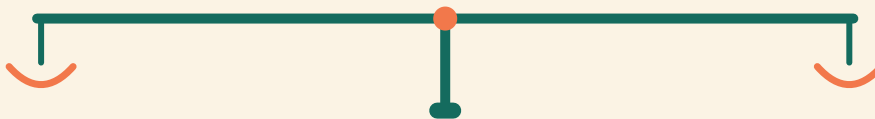
$4 + \square$



3

$17 + 2$

$12 + \square$



4

$9 + 4$

$10 + \square$

