



# Hvem har færrest?

Navn: \_\_\_\_\_ Dato: \_\_\_\_\_




Se på begge gruppene. Sett ring rundt gruppen med FÆRREST.

1



2



3

