

Skattejakt

Følg sporene og finn skatten!


























Start ved C3.

Flytt nordover 2 ruter.

Flytt sørover 2 ruter.

Flytt nordover 2 ruter.

Flytt sørover 2 ruter Hvor er skatten?

| | 1 | 2 | 3 | 4 | 5 |
|---|---|---|---|--|---|
| A |  |  |  |  |  |
| B |  |  |  |  |  |
| C |  |  |  |  |  |
| D |  |  |  |  |  |
| E |  |  |  |  |  |