

Skattejakt

Følg sporene og finn skatten!




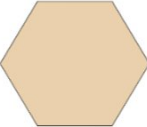



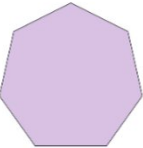


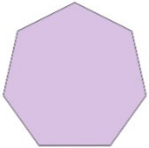

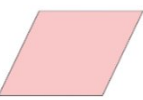
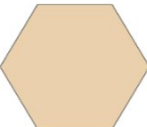

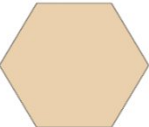
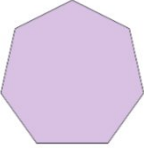

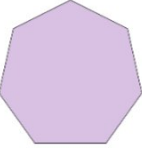





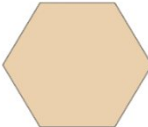
Start ved B2.

Flytt ned 2 ruter.

Flytt opp 2 ruter.

Flytt til høyre 2 ruter.

Flytt til venstre 3 ruter Hvor er skatten?

| | 1 | 2 | 3 | 4 | 5 |
|---|-------------------------------------------------------------------------------------|-------------------------------------------------------------------------------------|-------------------------------------------------------------------------------------|--------------------------------------------------------------------------------------|---------------------------------------------------------------------------------------|
| A |  |  |  |  |  |
| B |  |  |  |  |  |
| C |  |  |  |  |  |
| D |  |  |  |  |  |
| E |  |  |  |  |  |