




# Moro med Subtraksjon

Finn det manglende tallet for å fullføre subtraksjonen!

1.  -  \_\_\_ =  1

2.  -  \_\_\_ =  3

3.  -  \_\_\_ =  1

4.  -  \_\_\_ =  1

5.  -  \_\_\_ =  4

6.  -  \_\_\_ =  4