




# Moro med Subtraksjon

Finn det manglende tallet for å fullføre subtraksjonen!

1.  -  \_\_\_  1

2.  -  \_\_\_  1

3.  -  \_\_\_  1

4.  -  \_\_\_  4

5.  -  \_\_\_  1

6.  -  \_\_\_  7