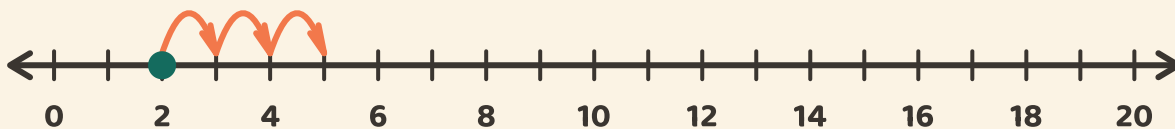


Hopp langs linja!

Navn: _____ Dato: _____

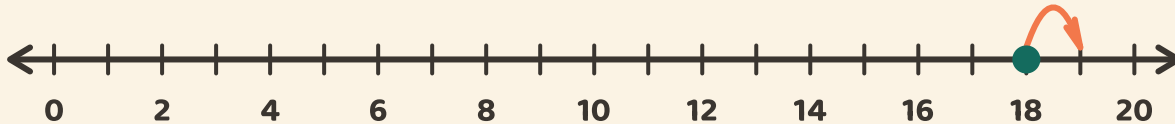
★ Start på prikken. Tell hoppene. Skriv svaret på addisjonen.

1



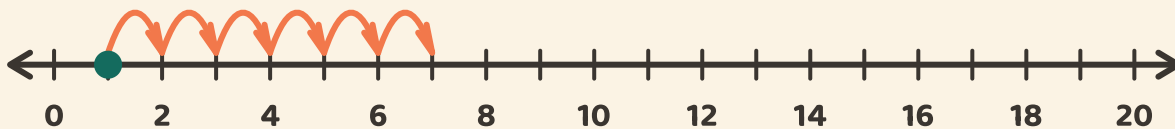
$$2 + 3 = \boxed{}$$

2



$$18 + 1 = \boxed{}$$

3



$$1 + 6 = \boxed{}$$