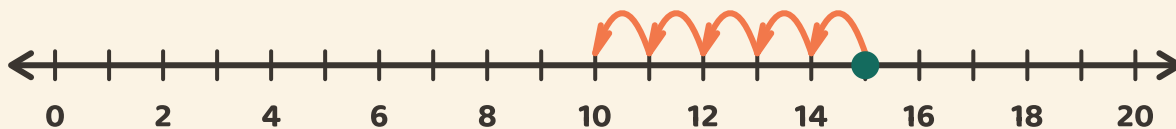


Hopp tilbake og trekk fra

Navn: _____ Dato: _____

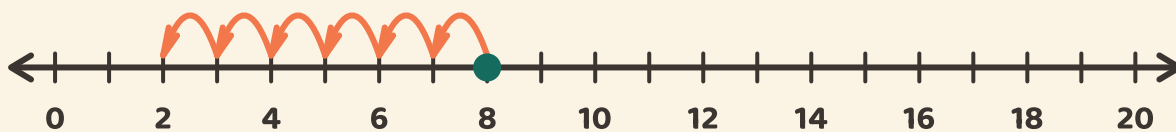
★ Følg hoppene bakover. Skriv svaret på subtraksjonen.

1



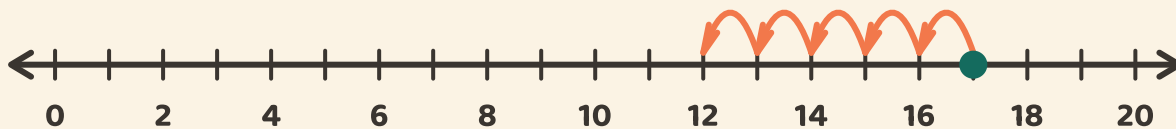
$$15 - 5 = \square$$

2



$$8 - 6 = \square$$

3



$$17 - 5 = \square$$