

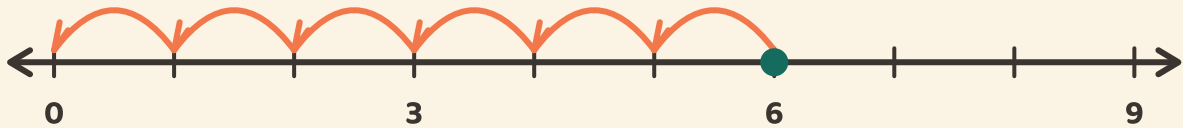
Hopp ned til null

Navn: _____ Dato: _____



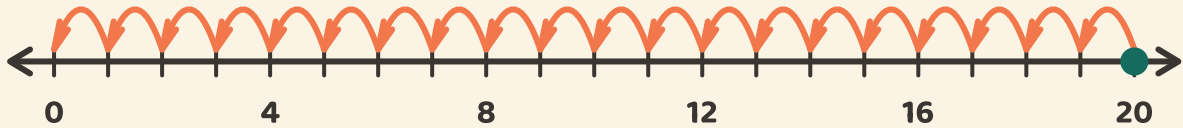
Tell de like hoppene tilbake til null. Skriv hvor mange hopp det tar.

1



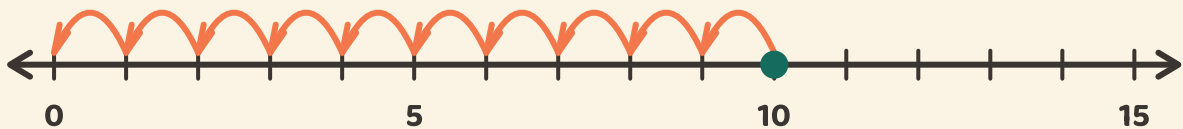
$$6 \div 3 = \boxed{}$$

2



$$20 \div 4 = \boxed{}$$

3



$$10 \div 5 = \boxed{}$$