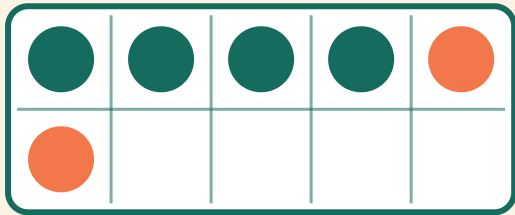


Addisjon i tierruten

Navn: _____ Dato: _____

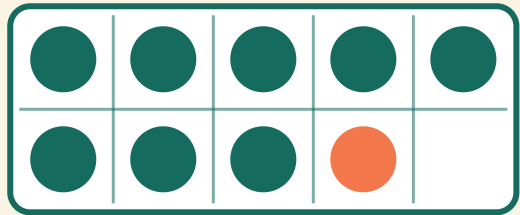
★ Tell de to fargene. Skriv svaret på addisjonsstykket.

1



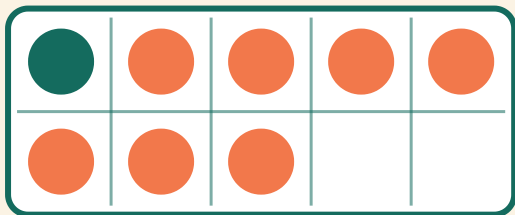
$$4 + 2 = \square$$

2




$$8 + 1 = \square$$

3



$$1 + 7 = \square$$

4



$$8 + 2 = \square$$