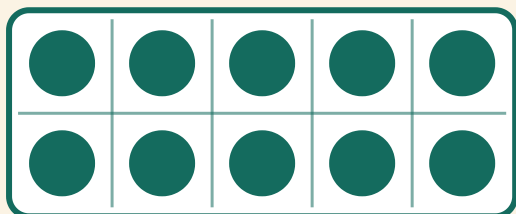


# Lag 10!

Navn: \_\_\_\_\_ Dato: \_\_\_\_\_

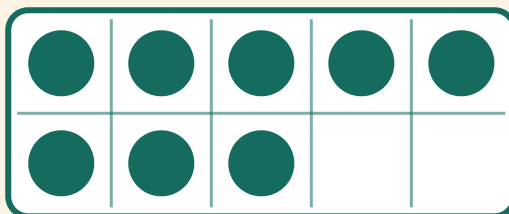
★ Hvor mange prikker til for å lage 10? Skriv tallet som mangler.

1



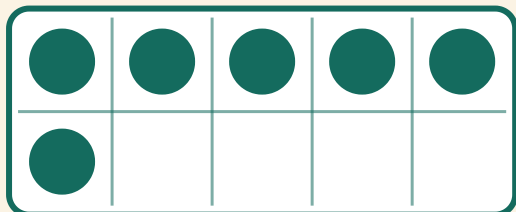
$$10 + \boxed{\phantom{00}} = 10$$

2



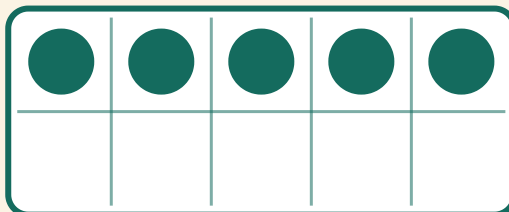
$$8 + \boxed{\phantom{00}} = 10$$

3



$$6 + \boxed{\phantom{00}} = 10$$

4



$$5 + \boxed{\phantom{00}} = 10$$