



Qual tem menos?


Nome: _____ Data: _____

★ Olhe os dois grupos. Circule o grupo que tem MENOS.

1



2



3

