


Partes justas?



Nome: _____ Data: _____

★ Circule cada forma dividida em partes IGUAIS.


1



2



3



4

