

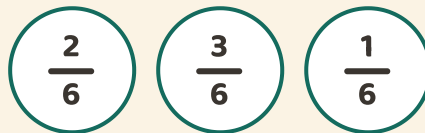
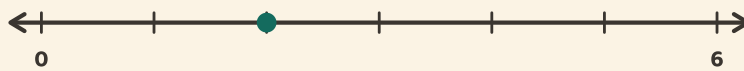
Frações na reta

Nome: _____ Data: _____

★ O ponto marca uma fração. Circule qual é.

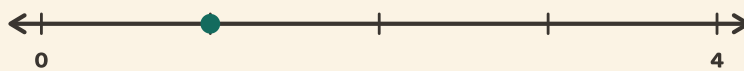
1

0 → 1 in 6 steps




2

0 → 1 in 4 steps



3

0 → 1 in 3 steps



4

0 → 1 in 4 steps

