






























Leia o gráfico de figuras

Nome: _____ Data: _____

★ Conte as figuras de cada fileira. Escreva os números.

	=	<input type="text"/>
	=	<input type="text"/>
	=	<input type="text"/>
	=	<input type="text"/>