

Da adição à multiplicação

Nome: _____ Data: _____


★ Conte os grupos iguais. Complete a multiplicação.

1




$$2 \times 2 = \square$$

2




$$3 \times 3 = \square$$

3



$$4 \times 2 = \square$$

4



$$2 \times 2 = \square$$