


Quantos grupos?

Nome: _____ Data: _____


★ Os círculos formam grupos iguais. Escreva quantos grupos há.

1




$$12 \div 4 = \square$$

2




$$4 \div 2 = \square$$

3



$$8 \div 4 = \square$$

4



$$12 \div 4 = \square$$