


Escolha a matriz

Nome: _____ Data: _____

★ Circule a matriz que combina com a multiplicação.

1


3×4



A vertical dashed line separates the matrix 3×4 from three options. Option 1 is a 3x4 grid of chess pieces. Option 2 is a 3x3 grid of chess pieces. Option 3 is a 3x3 grid of chess pieces.

2


2×4



A vertical dashed line separates the matrix 2×4 from three options. Option 1 is a 2x4 grid of diamonds. Option 2 is a 3x2 grid of diamonds. Option 3 is a 2x3 grid of diamonds.

3

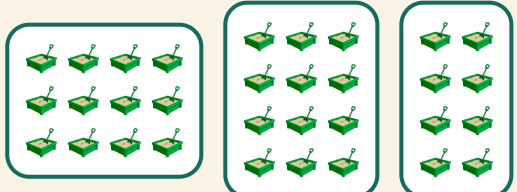
2×6



A vertical dashed line separates the matrix 2×6 from three options. Option 1 is a 2x2 grid of playing cards. Option 2 is a 2x6 grid of playing cards. Option 3 is a 2x6 grid of playing cards.

4

4×3



A vertical dashed line separates the matrix 4×3 from three options. Option 1 is a 4x4 grid of green cubes. Option 2 is a 3x3 grid of green cubes. Option 3 is a 3x2 grid of green cubes.