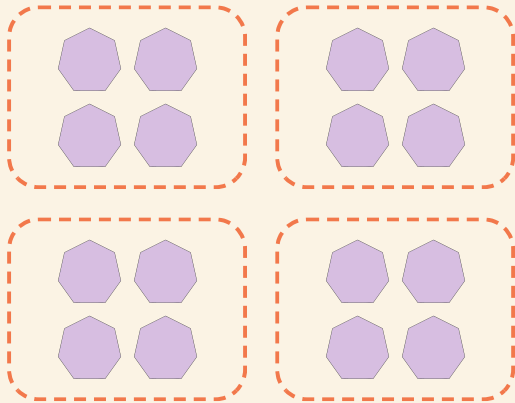


# Some de novo

Nome: \_\_\_\_\_ Data: \_\_\_\_\_

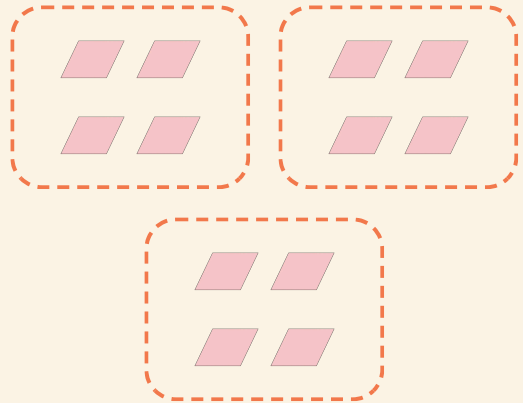
★ Cada círculo tem a mesma quantidade. Complete a adição.

1



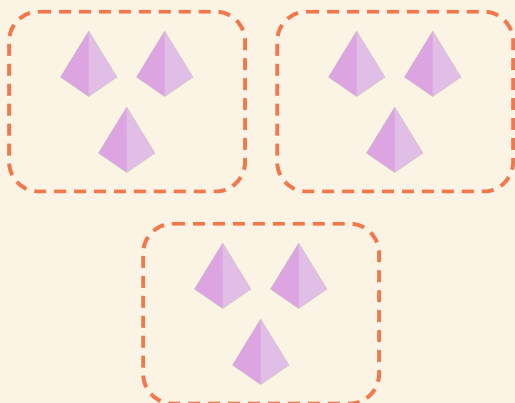
$$4 + 4 + 4 + 4 = \square$$

2



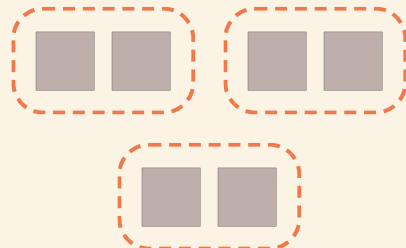
$$4 + 4 + 4 = \square$$

3



$$3 + 3 + 3 = \square$$

4



$$2 + 2 + 2 = \square$$