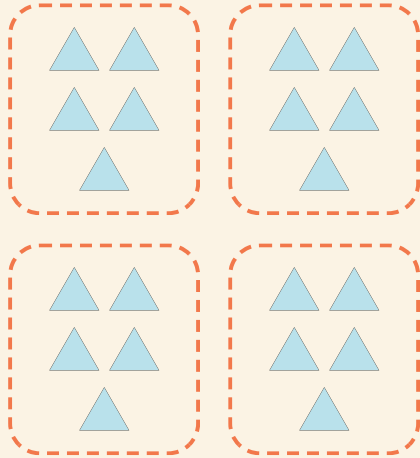


# Grupos fáceis

Nome: \_\_\_\_\_ Data: \_\_\_\_\_

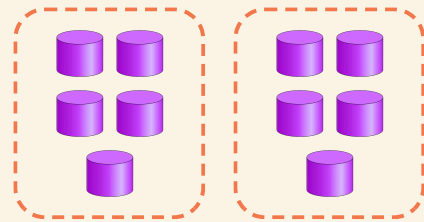
★ Conte os grupos iguais. Complete a multiplicação.

1



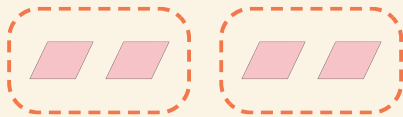
$$4 \times 5 = \square$$

2



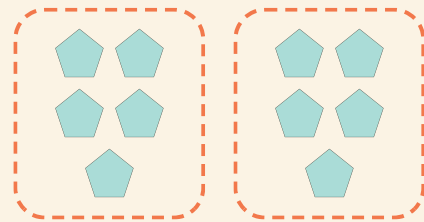
$$2 \times 5 = \square$$

3



$$2 \times 2 = \square$$

4



$$2 \times 5 = \square$$