


Da adição à multiplicação

Nome: _____ Data: _____


★ Conte os grupos iguais. Complete a multiplicação.

1




$$3 \times 4 = \square$$

2




$$4 \times 3 = \square$$

3



$$3 \times 2 = \square$$

4



$$3 \times 2 = \square$$