


# Quantos grupos?

Nome: \_\_\_\_\_ Data: \_\_\_\_\_

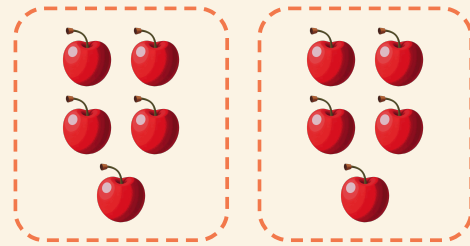
★ Os círculos formam grupos iguais. Escreva quantos grupos há.

1




$$20 \div 5 = \square$$

2




$$10 \div 5 = \square$$

3



$$12 \div 3 = \square$$

4



$$4 \div 2 = \square$$