

Conta com dominó

Nome: _____ Data: _____


★ Conte os dois lados do dominó. Escreva a soma.

1



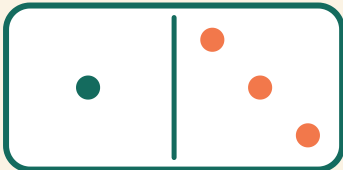
$$6 + 6 = \square$$

2




$$4 + 3 = \square$$

3



$$1 + 3 = \square$$

4



$$2 + 6 = \square$$