


Conte os quadradinhos

Nome: _____ Data: _____


★ Conte os quadradinhos do retângulo. Complete a multiplicação.

1




$3 \times 5 = \square$

2




$4 \times 4 = \square$

3



$4 \times 5 = \square$

4



$3 \times 9 = \square$