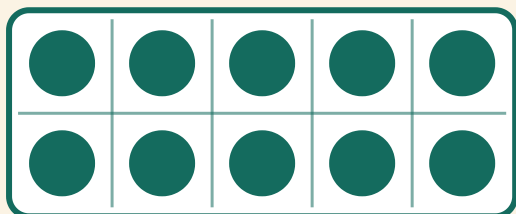


Forme o 10

Nome: _____ Data: _____

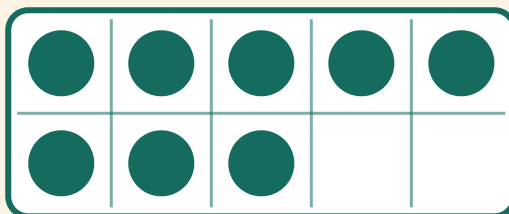
★ Quantas bolinhas faltam para formar 10? Escreva o número que falta.

1



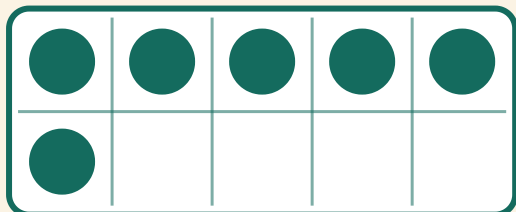
$$10 + \boxed{} = 10$$

2



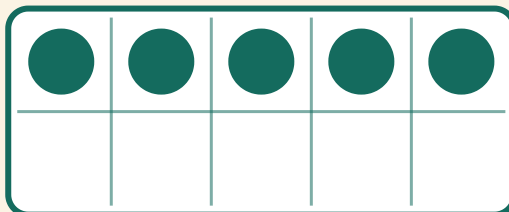
$$8 + \boxed{} = 10$$

3



$$6 + \boxed{} = 10$$

4



$$5 + \boxed{} = 10$$